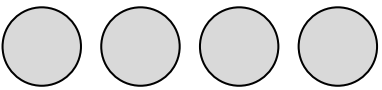




Pictograms Homework

1) Key:  represents 4 pizzas

Jim	
Cara	
Kai	

a) How many pizzas did Jim eat?

b) How many more pizzas did Kai eat than Cara?

c) How many pizzas were eaten altogether?

2) Complete the pictogram for the number of coffees drank in a week

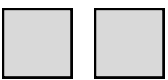
Tilly: 16

Sam: 12

Zak: 42

Lara: 30

Key:  represents ___ coffees

Tilly	
Sam	
Zak	
Lara	

Copyright © 2021: www.mathscloud.co.uk

Mark:

Grade:

I did well at:

To Improve I need to:

Try: