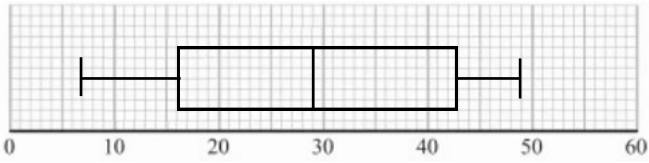


Boxplots Homework

1) Calculate:



a) Median:

b) Range:

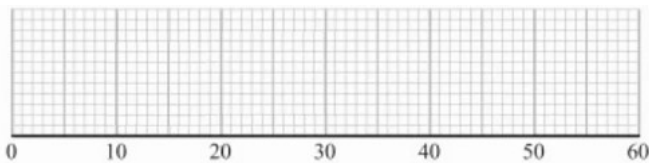
c) Interquartile range:

2) Plot the boxplot for the following data:


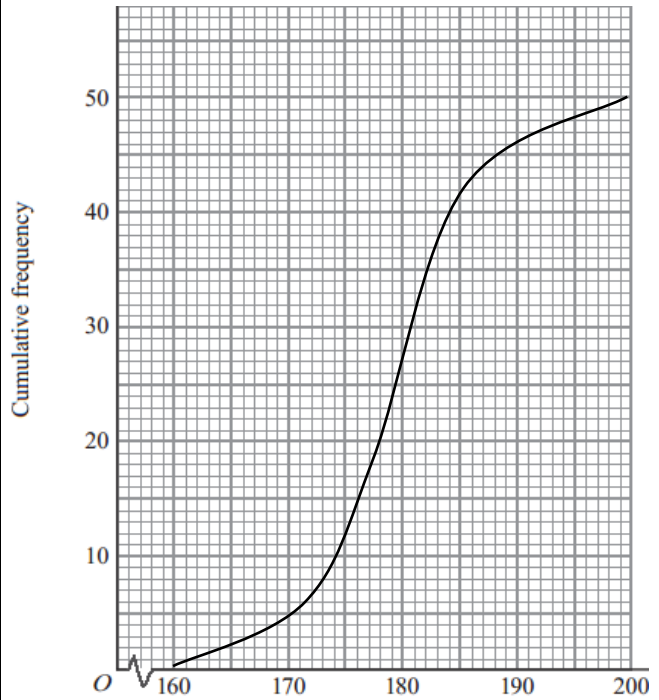
Median = 32 Highest value = 51

Upper quartile = 44 Lowest Value = 8

Lower Quartile = 17



3) Represent the data in a boxplot



Copyright © 2021: www.mathscloud.co.uk

Mark:

Grade:

I did well at:

To Improve I need to:

Try: