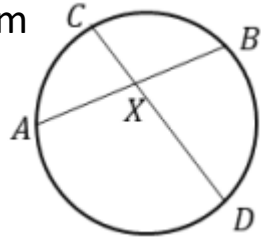


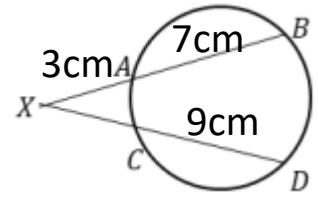
Intersecting Chords & Secants Homework

1) $AX = 7\text{cm}$, $CX = 3\text{cm}$

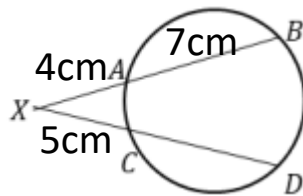
$DX = 8\text{cm}$, Find BX



3) Find CX



2) Find CD



Copyright © 2021: www.maths-cloud.co.uk

Mark:

Grade:

I did well at:

To Improve I need to:

Try: