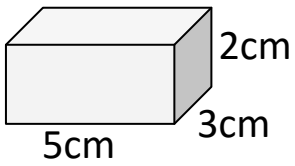
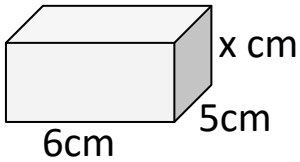


## Volume Homework

1a) Find the volume of the cuboid:

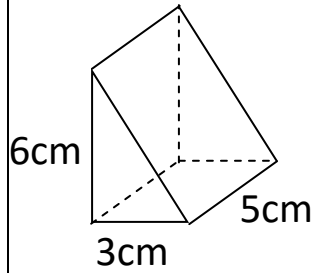


b) Find the length  $x$

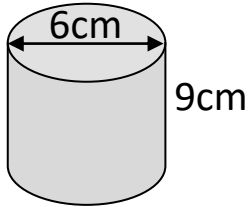


$$\text{Volume} = 120\text{cm}^3$$

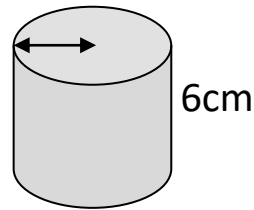
2) Find the volume of the prism:



3) Find the volume of the cylinder:



4) Find the radius of the cylinder:



$$\text{Volume} = 250\text{cm}^3$$

Copyright © 2021: [www.mathscloud.co.uk](http://www.mathscloud.co.uk)

Mark:

Grade:

I did well at:

To Improve I need to:

Try: