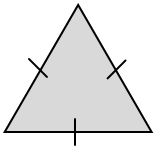


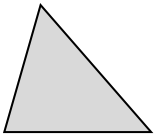
Types Of Triangles Homework

1) Identify the types of triangles

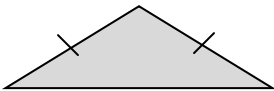
a)



b)



c)



2) What are the properties of:

a) A right angled triangle

b) An equilateral triangle

c) A scalene triangle

3) Identify the types of triangles:

a) Sides: 5cm, 8cm, 5cm

b) Sides: 9cm, 3cm, 7cm

c) Angles: 75° , 75° , 30°

d) Angles: 53° , 47° , 90°

4) Draw an isosceles triangle with angles: 70° , 70° and 40°

Copyright © 2021: www.mathscloud.co.uk

Mark:

Grade:

I did well at:

To Improve I need to:

Try: