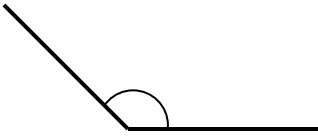
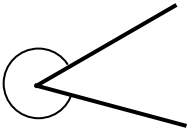
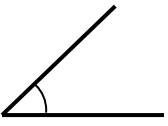


Types Of Angles Homework

<p>1) Identify the types of angles</p> <p>a) </p> <p>b) </p> <p>c) </p>	<p>2) Draw:</p> <p>a) A right angle</p> <p>b) An acute angle</p>
<p>3) Identify the types of angles:</p> <p>a) 134°</p> <p>b) 26°</p> <p>c) 92°</p> <p>d) 193°</p> <p>e) 90°</p>	<p>4) Draw an angle measuring:</p> <p>a) 34°</p> <p>b) 136°</p>

Copyright © 2021: www.mathscloud.co.uk

Mark:	Grade:
I did well at:	To Improve I need to:
<p><u>Try:</u></p>	