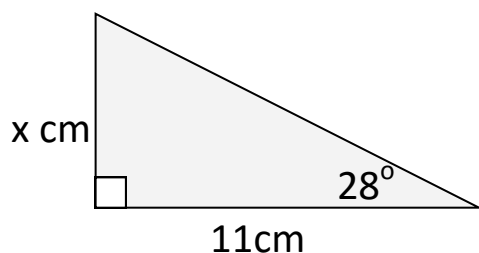
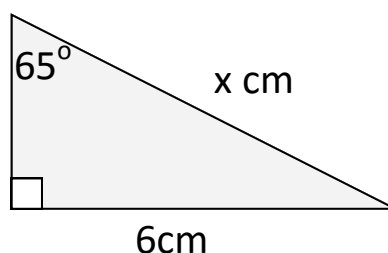


## Trigonometry Homework

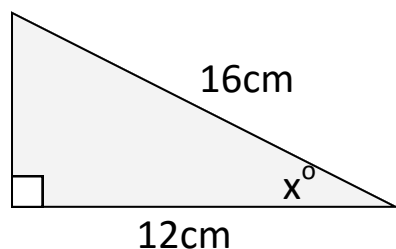
1) Find the missing side x



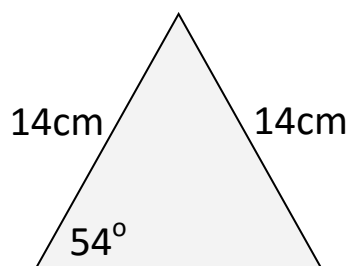
2) Find the missing side x



3) Find the missing angle



4) Find the base of the triangle



Copyright © 2021: [www.mathscloud.co.uk](http://www.mathscloud.co.uk)

Mark:

Grade:

I did well at:

To Improve I need to:

Try: