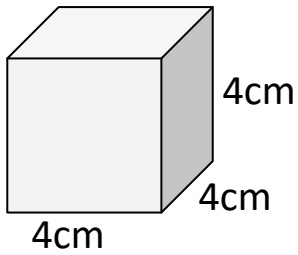
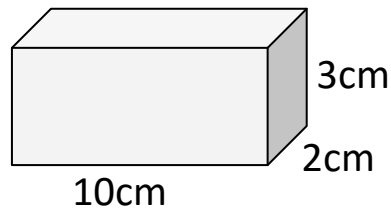


Surface Area Homework

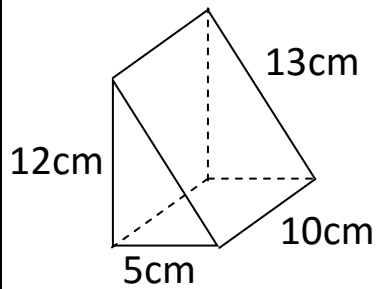
1) Find the surface area of the cube:



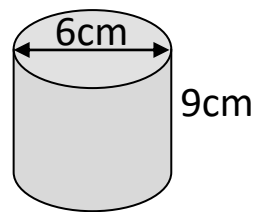
2) Find the surface area of the cuboid:



3) Find the surface area of the prism:



4) Find the surface area of the cylinder:



Copyright © 2021: www.mathscloud.co.uk

Mark:

Grade:

I did well at:

To Improve I need to:

Try: