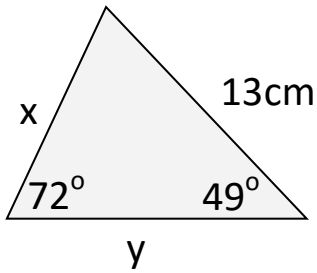
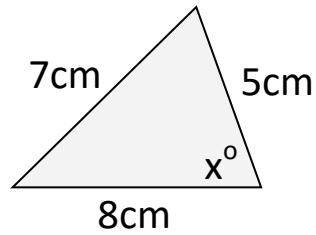


Sine, Cosine & Areas Of Triangles Homework

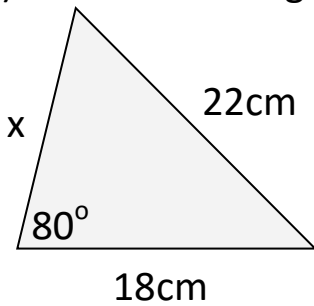
1) Find x and y



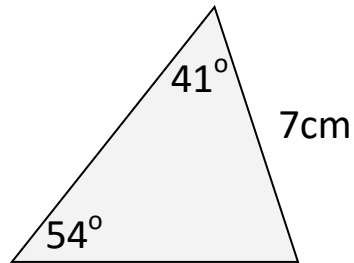
2) Find the angle x



3) Find the missing side



4) Find the area of the triangle



Copyright © 2021: www.mathscloud.co.uk

Mark:

Grade:

I did well at:

To Improve I need to:

Try: