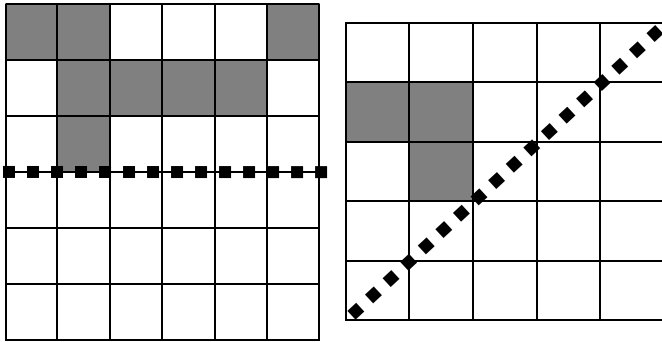
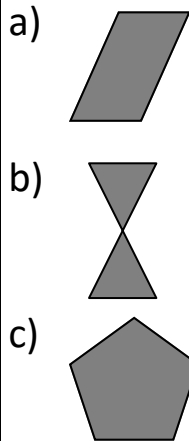


## Reflections Homework

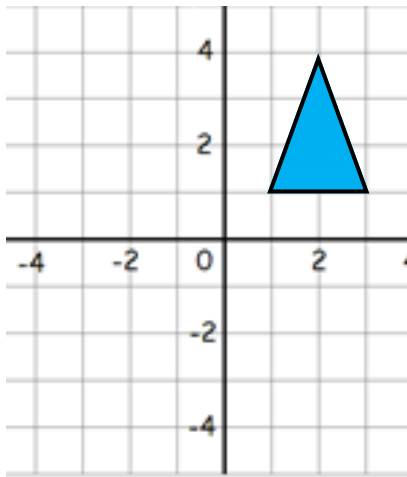
1) Reflect the shapes in the mirror lines



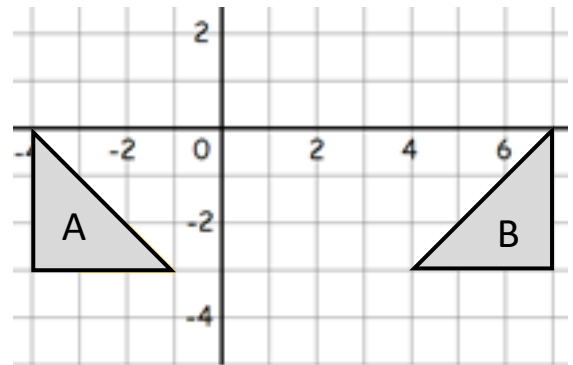
2) How many lines of symmetry?



3) Reflect the shape in the line  $y = 0$



4) Describe the transformation from shape A to B



Copyright © 2021: [www.mathscloud.co.uk](http://www.mathscloud.co.uk)

Mark:

Grade:

I did well at:

To Improve I need to:

Try: