

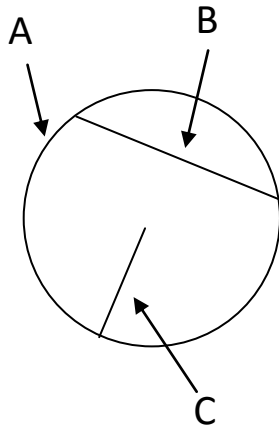
Parts Of Circles Homework

1) Write down the parts of the circles:

A:

B:

C:

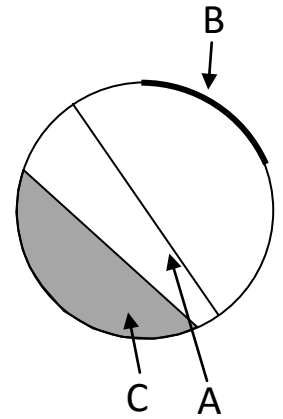


2) Write down the parts of the circles:

A:


B:

C:




3) On the circles draw a:

a) Tangent



b) Sector



4) Use a compass to draw a circle with diameter 3cm

Copyright © 2021: www.mathscloud.co.uk

Mark:

Grade:

I did well at:

To Improve I need to:

Try: