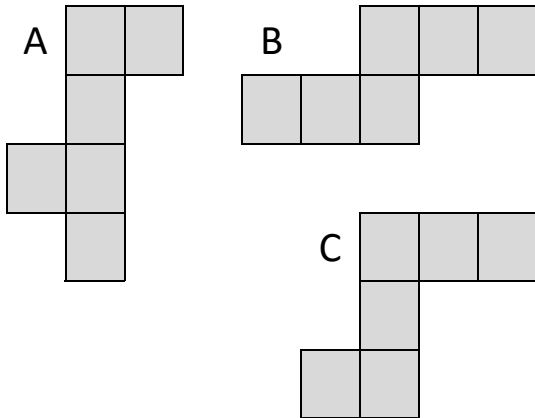


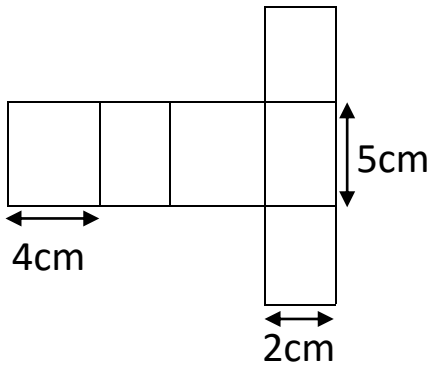
Nets Homework

1) Circle the nets of the cubes

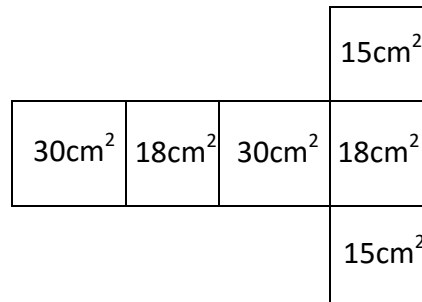


2) Draw the net of a square based pyramid

3) Find the surface area of the cuboid



4) Find the volume of the cuboid



Copyright © 2021: www.mathscloud.co.uk

Mark:

Grade:

I did well at:

To Improve I need to:

Try: