



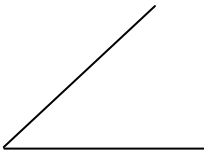
Measures Homework


1) Measure the lines to the nearest tenth of a centimetre

a) 

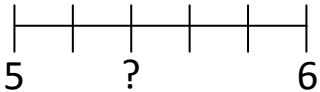
b) 

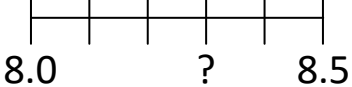
2) Measure the angles to the nearest degree

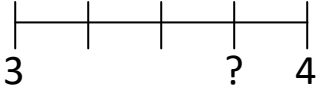
a) 

b) 

3) Find the missing numbers on the scales

a) 

b) 

c) 

4) I have a 400ml measuring jug.

a) How could I measure 550ml?

b) How could I measure 1.03 Litres?

Copyright © 2021: www.mathscloud.co.uk

Mark:

Grade:

I did well at:

To Improve I need to:

Try: