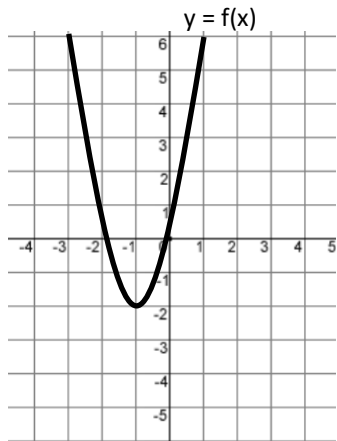
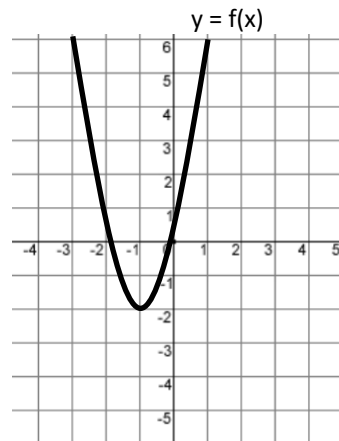


Graph Transformations Homework

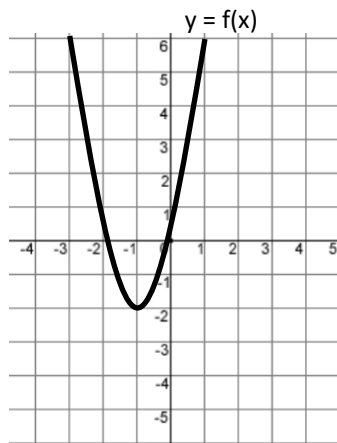
1) Sketch $y = f(x + 2)$



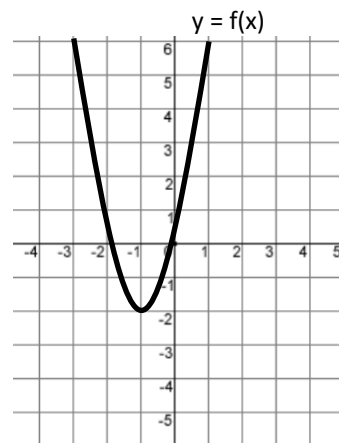
2) Sketch $y = f(x) - 3$



3) Sketch $y = 2f(x)$



4) Sketch $y = f(-x)$



Copyright © 2021: www.mathscloud.co.uk

Mark:

Grade:

I did well at:

To Improve I need to:

Try: