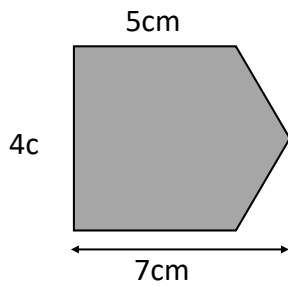
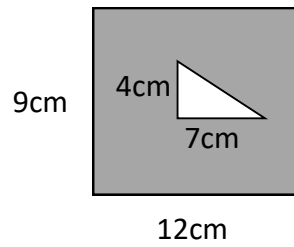


## Area of Compound Shapes Homework

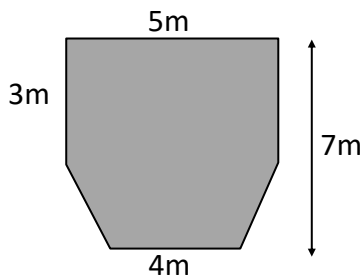
1) Find the area:



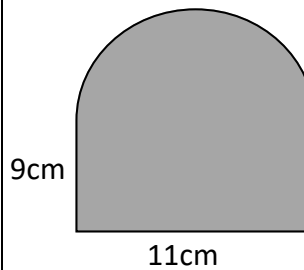
2) Find the area:



3) Find the area:



4) Find the area:



Copyright © 2021: [www.mathscloud.co.uk](http://www.mathscloud.co.uk)

Mark:

Grade:

I did well at:

To Improve I need to:

Try: