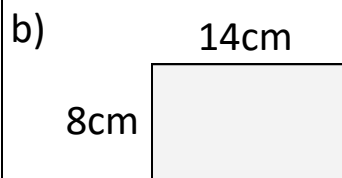
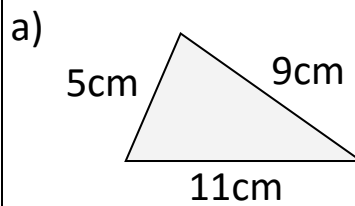


Area & Perimeter By Measuring & Counting Homework

1) Find the perimeter of the shape by measuring the sides




2) Find the perimeters of the shapes:



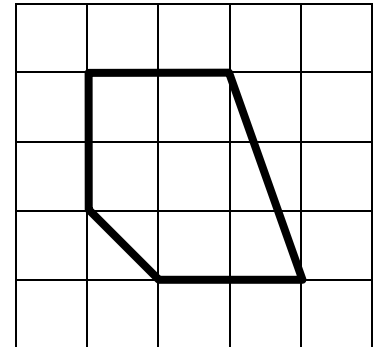
3) Find the area and perimeter of the shape:

Area:

Perimeter:



4) Calculate the area of the shape:



Copyright © 2021: www.mathscloud.co.uk

Mark:

Grade:

I did well at:

To Improve I need to:

Try: