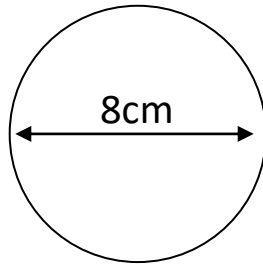


## Area & Circumference Homework

1) Find the:

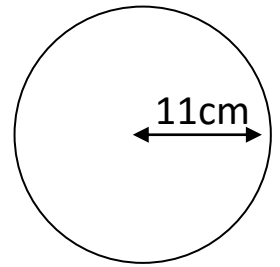
a) Circumference



b) Area

2) Find the:

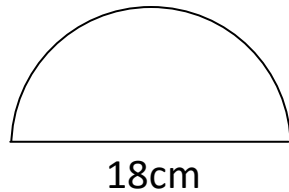
a) Circumference



b) Area

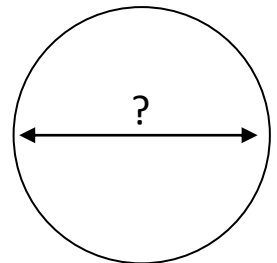
3) Find the:

a) Perimeter



b) Area

4) Find the diameter of a circle which has an area of  $200\text{cm}^2$



Copyright © 2021: [www.mathscloud.co.uk](http://www.mathscloud.co.uk)

Mark:

Grade:

I did well at:

To Improve I need to:

Try: