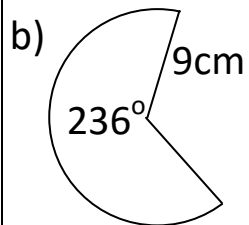
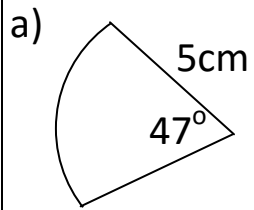
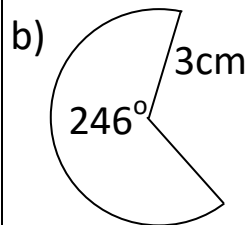
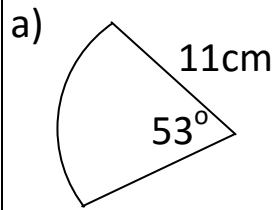


Arcs & Sectors Homework

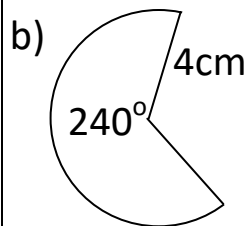
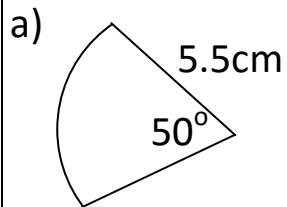
1) Find the length of the arcs:



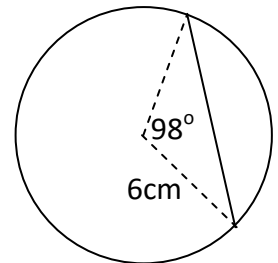
2) Find the perimeter of the sectors:



3) Find the area of the sectors:



4) Find the area of the minor segment of the circle



Copyright © 2021: www.mathscloud.co.uk

Mark:

Grade:

I did well at:

To Improve I need to:

Try: