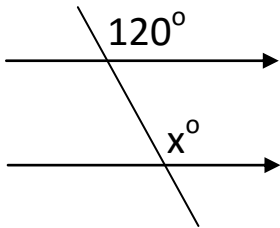


Angles On Parallel Lines Homework

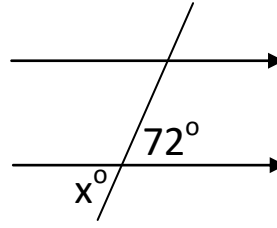
1a) Calculate the missing angle:



$x =$ _____

b) Give a reason for your answer

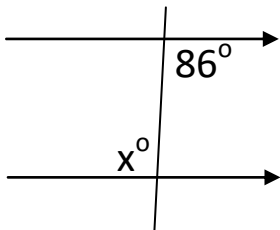
2) Calculate the missing angle:



$x =$ _____

b) Give a reason for your answer

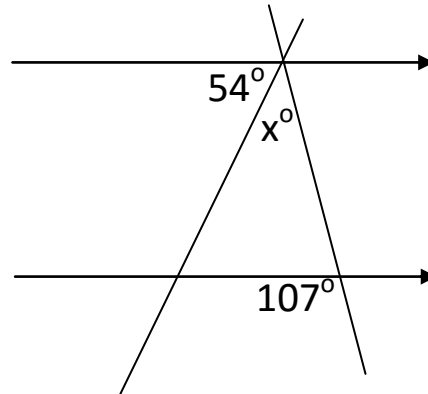
3) Calculate the missing angle:



$x =$ _____

b) Give a reason for your answer

4) Calculate the missing angle:



$x =$ _____

Copyright © 2021: www.mathscloud.co.uk

Mark:

Grade:

I did well at:

To Improve I need to:

Try: