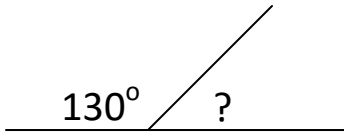


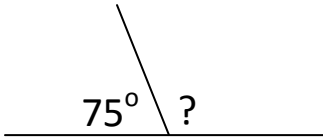
Angles On A Line & Around A Point Homework

1) Calculate the missing angles:

a)

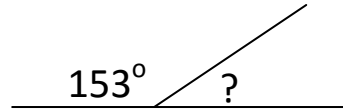


b)

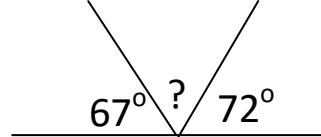


2) Calculate the missing angles

a)

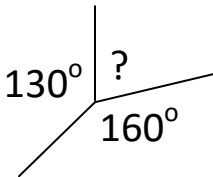


b)

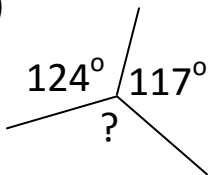


3) Calculate the missing angles:

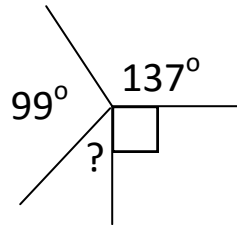
a)



b)



4) Calculate the missing angle



Copyright © 2021: www.mathscloud.co.uk

Mark:

Grade:

I did well at:

To Improve I need to:

Try: