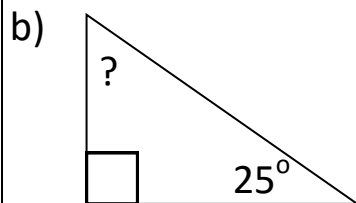
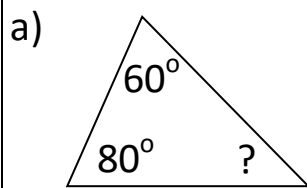
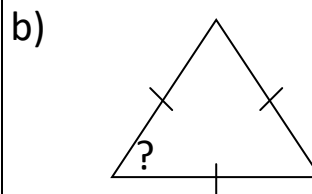
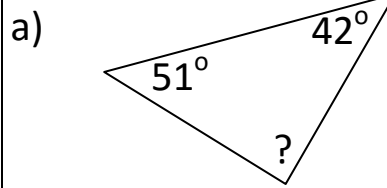


Angles In Triangles & Quadrilaterals Homework

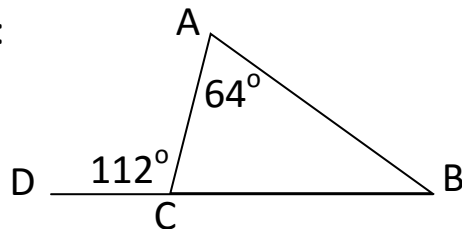
1) Calculate the missing angles:



2) Calculate the missing angles



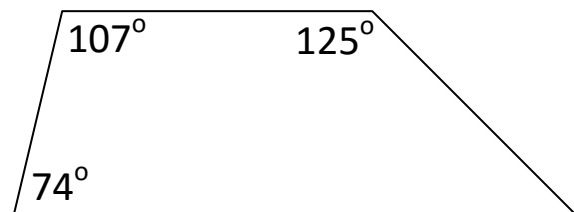
3) Calculate:



a) Angle ACB

b) Angle ABC

4) Calculate the missing angle



Copyright © 2021: www.mathscloud.co.uk

Mark:

Grade:

I did well at:

To Improve I need to:

Try: