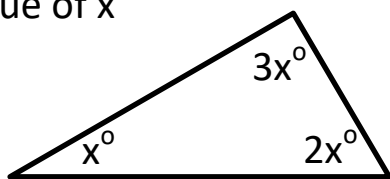
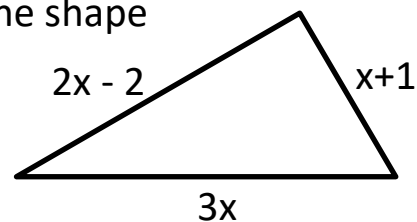


Algebra in Shapes Homework

1) Find the value of x

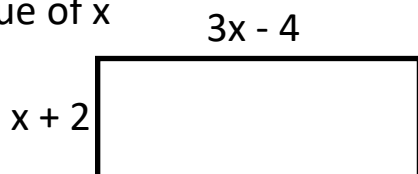


2) Write an expression for the perimeter of the shape



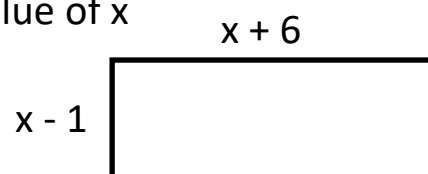
3) Perimeter = 48cm

Find the value of x



4) Area = 30cm^2

Find the value of x



Copyright © 2021: www.mathscloud.co.uk

Mark:

Grade:

I did well at:

To Improve I need to:

Try: