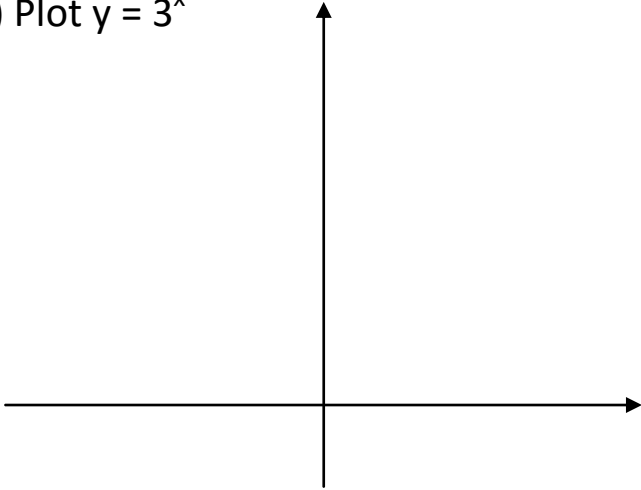
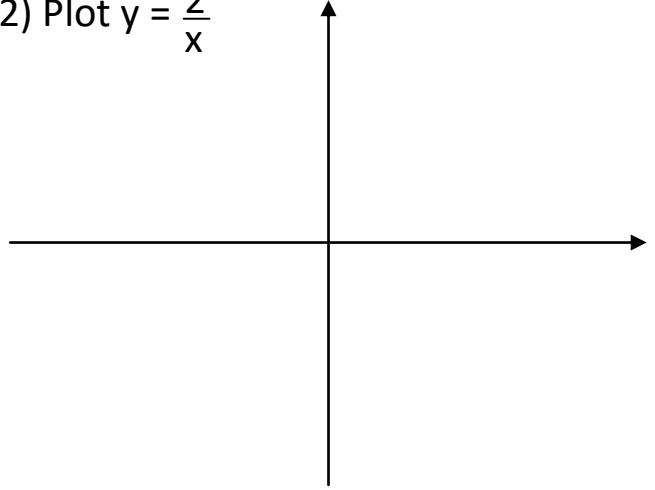


Harder Graphs Homework

1) Plot $y = 3^x$



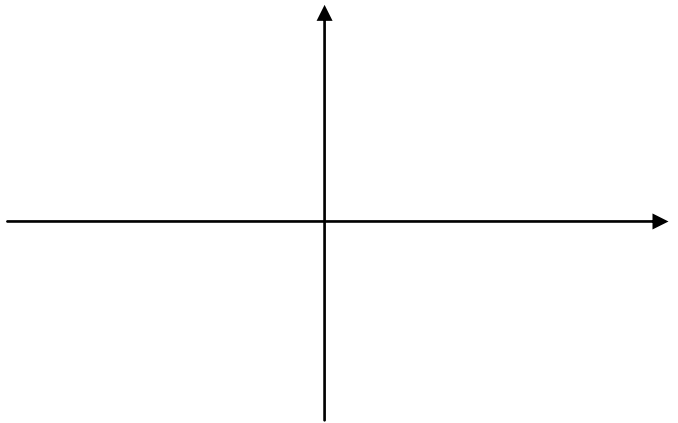
2) Plot $y = \frac{2}{x}$



3) Plot $y = \cos(x)$, $0 \leq x \leq 360$



4) Plot $y = \tan(x)$, $-180 \leq x \leq 180$



Copyright © 2021: www.mathscloud.co.uk

Mark:

Grade:

I did well at:

To Improve I need to:

Try: