

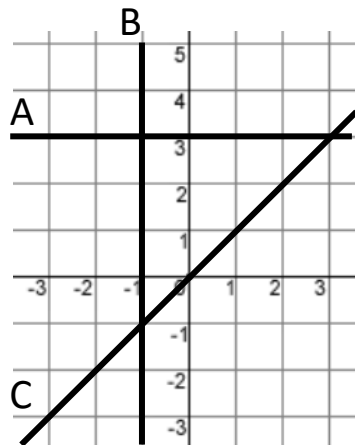
## Equations Of Lines Homework

1) Write down the equations of the lines:

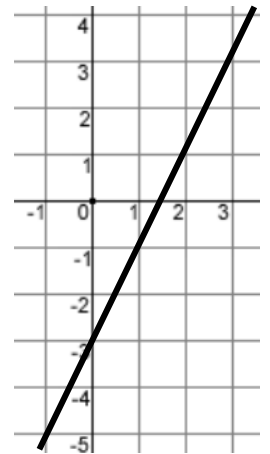
A:

B:

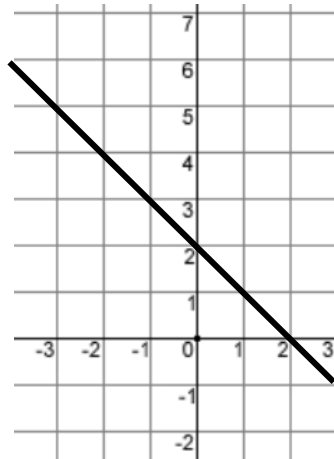
C:



2) Write down the equation of the line



3) Write down the equation of the line



4) Find the equation of the line:

a) Perpendicular to  $y = -4x + 3$  with y-intercept 3

b) Parallel to  $y = 2x - 4$  passing through  $(0, 7)$

Copyright © 2021: [www.mathscloud.co.uk](http://www.mathscloud.co.uk)

Mark:

Grade:

I did well at:

To Improve I need to:

Try: