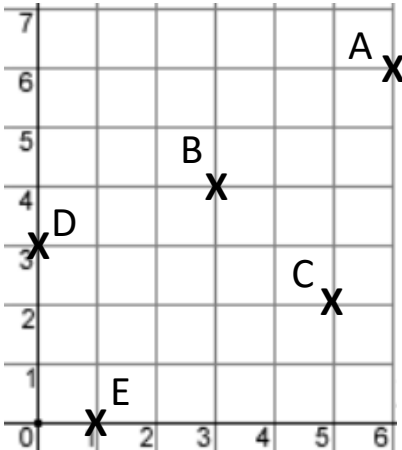

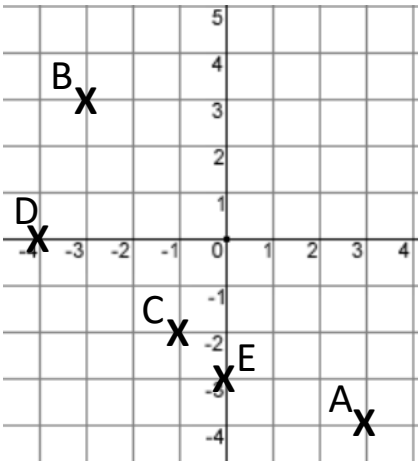
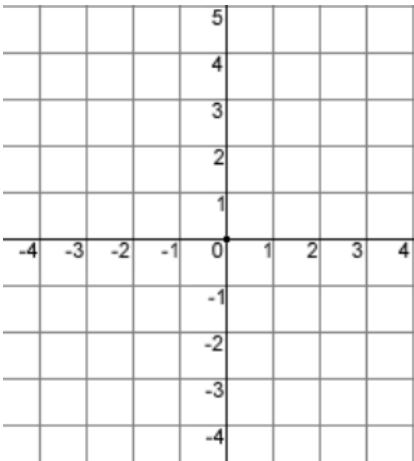


Co-ordinates Homework

<p>1) Write down the co-ordinates of:</p> <p>A: </p> <p>B:</p> <p>C:</p> <p>D:</p> <p>E:</p>	<p>2) Plot:</p> <p>a) (2, 2)</p> <p>b) (3, 1)</p> <p>c) (0, 5)</p> <p>d) (6, 4)</p> <p>e) (2.5, 0)</p> 
<p>3) Write down the co-ordinates of:</p> <p>A: </p> <p>B:</p> <p>C:</p> <p>D:</p> <p>E:</p>	<p>4) Plot:</p> <p>a) (3, -3)</p> <p>b) (-1, -4)</p> <p>c) (-2, 2)</p> <p>d) (0, -1)</p> <p>e) (0.5, -3.5)</p> 

Copyright © 2021: www.mathscloud.co.uk

<p>Mark:</p>	<p>Grade:</p>
<p>I did well at:</p>	<p>To Improve I need to:</p>
<p><u>Try:</u></p>	