

## Solving Inequalities Assessment

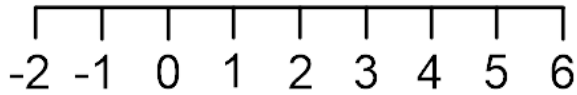
1a)

b)

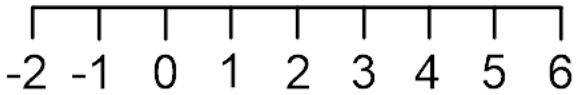
c)

2)

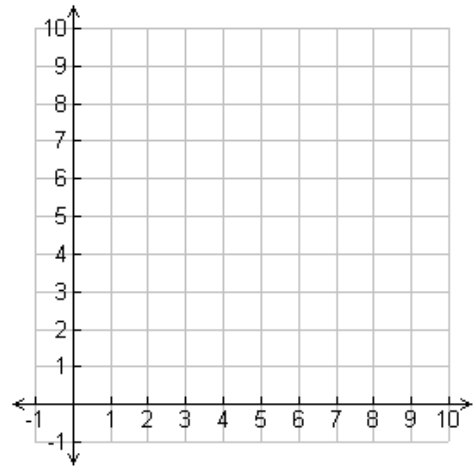
3a)



b)



4)



Mark:

Grade:

I did well at:

To Improve I need to:

Try: