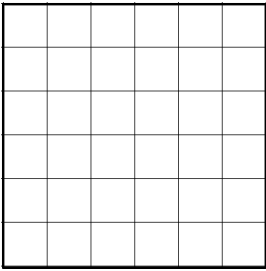
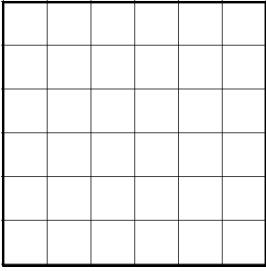
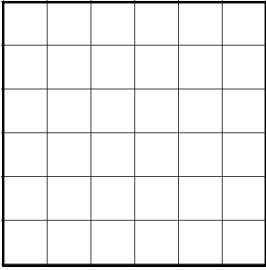



Elevations & Isometric Grids Assessment

<p>1)</p> <div data-bbox="247 235 513 504"></div> <p data-bbox="544 338 619 371">Plan</p> <div data-bbox="247 609 513 878"></div> <p data-bbox="544 651 703 763">Front Elevation</p> <div data-bbox="247 981 513 1249"></div> <p data-bbox="544 1039 703 1151">Side Elevation</p>	<p>2)</p> <div data-bbox="842 280 1455 878"></div>
---	--

Mark:	Grade:
I did well at:	To Improve I need to:

Try: